



What's the Sentence Cards: Tenths

Ricky ate $\frac{3}{10}$ of a celery stalk. His brother ate $\frac{5}{10}$. How much celery did they eat?

Ariel cut $\frac{2}{10}$ of a ribbon. She cut $\frac{3}{10}$ more. How much ribbon did she cut?



Chelsea ate $\frac{7}{10}$ of a granola bar. She ate $\frac{1}{10}$ more. How much granola bar did she eat?

Taylor had $\frac{9}{10}$ of a sheet of paper. She colored $\frac{2}{10}$ of the paper. How much paper is colored?

There is $\frac{8}{10}$ of casserole in the pan. Trent ate $\frac{3}{10}$ of casserole. How much casserole is left?

Mrs. Yang has $\frac{6}{10}$ of a block of clay. She gave $\frac{5}{10}$ to her students. How much clay is left?

Hundredths Mat



What's the Sentence Cards: Hundredths

On Thursday, it rained $\frac{41}{100}$ of an inch. The following day, it rained $\frac{22}{100}$ of an inch. What is the rainfall for both days?

There is $\frac{50}{100}$ of an inch of water in a container. Jocelyn poured out $\frac{25}{100}$ of an inch. How much water is left?



The grass is $\frac{30}{100}$ of an inch tall. It grew $\frac{25}{100}$ of an inch. How tall is the grass?

It snowed $\frac{20}{100}$ of an inch on Saturday and $\frac{12}{100}$ of an inch on Sunday. How much snow fell in all?





Each insect is $\frac{40}{100}$ of an inch long. How long are 2 insects?

It rained $\frac{70}{100}$ of an inch on Wednesday and $\frac{40}{100}$ of an inch on Friday. How much more rain fell on Wednesday than Friday?

Fractions and Decimals Mat



Equivalence Sheet



Comparison Cards

$$\frac{5}{10}$$

$$\frac{6}{10}$$

$$\frac{7}{10}$$

$$\frac{8}{10}$$

$$\frac{5}{10}$$

$$\frac{6}{10}$$

$$\frac{7}{10}$$

$$\frac{8}{10}$$

$$\frac{5}{10}$$

$$\frac{6}{10}$$

Comparison Cards

$$\frac{56}{100}$$

$$\frac{63}{100}$$

$$\frac{78}{100}$$

$$\frac{81}{100}$$

$$\frac{49}{100}$$

$$\frac{52}{100}$$

$$\frac{67}{100}$$

$$\frac{74}{100}$$

$$\frac{88}{100}$$

$$\frac{65}{100}$$

Equivalence Cards: Tenths to Hundredths

$$\frac{1}{10}$$

$$\frac{2}{10}$$

$$\frac{3}{10}$$

$$\frac{4}{10}$$

$$\frac{5}{10}$$


$$\frac{6}{10}$$

$$\frac{7}{10}$$

$$\frac{8}{10}$$

$$\frac{9}{10}$$

Place Value Chart

Hundredths	
Tenths	
Ones	



Matching Cards: Decimals

6.35

$$6 + 0.3 + 0.05$$

6.23

$$6 + 0.2 + 0.03$$

9.04

$$9 + 0.04$$

9.4

$$9 + 0.4$$

Matching Cards: Decimals

8.12

$$8 + 0.1 + 0.02$$

2.07

$$2 + 0.07$$

7.5

$$7 + 0.5$$

8.21

$$8 + 0.2 + 0.016$$

Constructing a Number Line Cards

8

$8\frac{2}{10}$

8.4

8.7

$8\frac{8}{10}$

$8\frac{9}{10}$

9

9.1

9.3

$9\frac{5}{10}$

9.6

$9\frac{7}{10}$


$9\frac{8}{10}$

9.9


10

Who has more? Cards


0.2




$$\frac{72}{100}$$



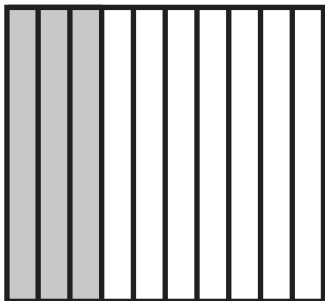
0.25




$$\frac{14}{100}$$



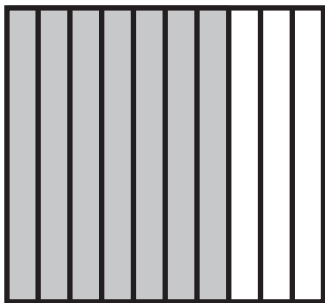
0.3




$$\frac{39}{100}$$




0.7




$$\frac{5}{10}$$



.89

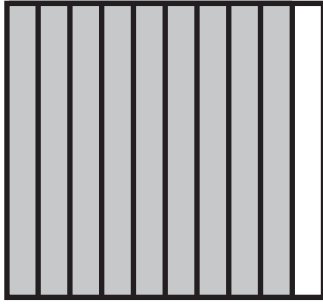


$$\frac{1}{10}$$




Decimal Ordering Cards

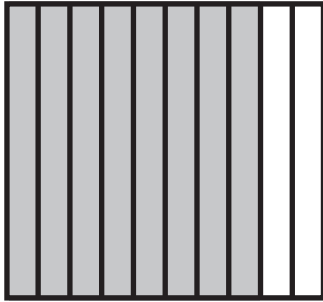
0.9




0.14




0.8




0.29



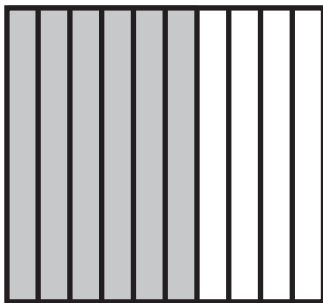
0.5




0.39




0.6




0.06



0.4




0.03



Decimal Ordering Cards

1



0.05

